


ADDITION EXERCISES

Name : Class :

Match the figures with the correct answers; use a ruler to draw an arrow pointing to the corresponding answer

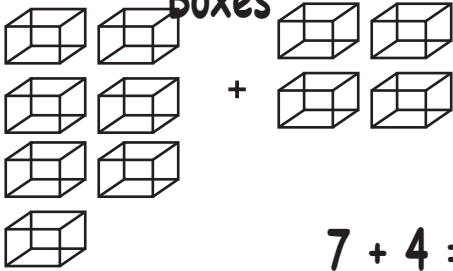
Questions

Fish

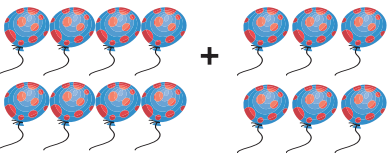


$$2 + 3 =$$

Boxes



$$7 + 4 =$$



Balloons

$$8 + 6 =$$

Stars



$$6 + 4 =$$

10

14

5

11