

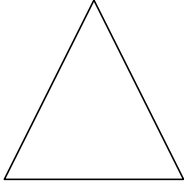
Name: _____

Date: _____

Geometry


Identify each shape by marking the name that best describes it:

1)




- A. Rectangle
- B. Triangle
- C. Rhombus
- D. Ellipse

2)



- A. Circle
- B. Ellipse
- C. Square
- D. Rectangle

3)



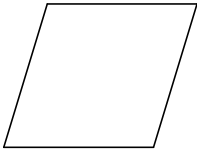
- A. Square
- B. Rhombus
- C. Ellipse
- D. Triangle

4)



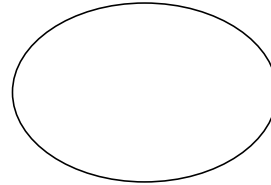
- A. Triangle
- B. Rectangle
- C. Rhombus
- D. Circle

5)



- A. Rhombus
- B. Rectangle
- C. Square
- D. Ellipse

6)




- A. Rectangle
- B. Ellipse
- C. Circle
- D. Triangle

7)



- A. Rectangle
- B. Square
- C. Ellipse
- D. Rhombus

8)



- A. Square
- B. Rectangle
- C. Circle
- D. Rhombus

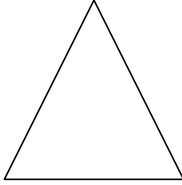
Name: _____

Date: _____

Geometry


Identify each shape by marking the name that best describes it:

1)




- A. Rectangle C. Rhombus
 B. Triangle D. Ellipse

2)



- A. Circle C. Square
B. Ellipse D. Rectangle

3)



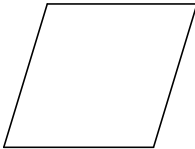
- A. Square C. Ellipse
B. Rhombus D. Triangle

4)



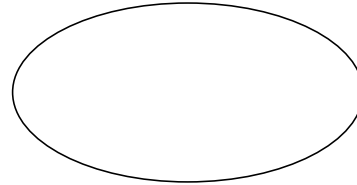
- A. Triangle C. Rhombus
 B. Rectangle D. Circle

5)




- A. Rhombus C. Square
B. Rectangle D. Ellipse

6)




- A. Rectangle C. Circle
 B. Ellipse D. Triangle

7)



- A. Rectangle C. Ellipse
B. Square D. Rhombus

8)



- A. Square C. Circle
B. Rectangle D. Rhombus