

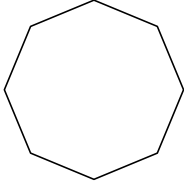
Name: _____

Date: _____

Geometry - Shapes

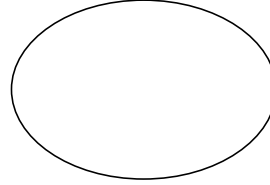
Identify each shape by marking the name that best describes it:

1)



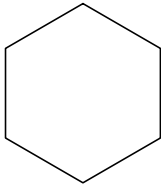
- A. Hexagon
- B. Septagon
- C. Rhombus
- D. Octagon

2)



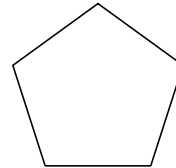
- A. Ellipse
- B. Rhombus
- C. Septagon
- D. Pentagon

3)



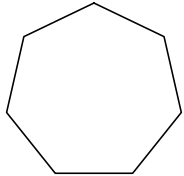
- A. Hexagon
- B. Rhombus
- C. Septagon
- D. Ellipse

4)



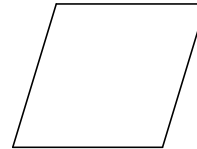
- A. Ellipse
- B. Hexagon
- C. Octagon
- D. Pentagon

5)



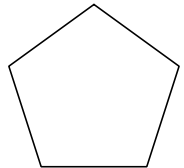
- A. Septagon
- B. Hexagon
- C. Pentagon
- D. Ellipse

6)



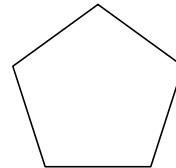
- A. Pentagon
- B. Rhombus
- C. Octagon
- D. Ellipse

7)



- A. Rhombus
- B. Pentagon
- C. Septagon
- D. Octagon

8)



- A. Ellipse
- B. Hexagon
- C. Rhombus
- D. Pentagon

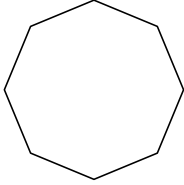
Name: _____

Date: _____

Geometry - Shapes

Identify each shape by marking the name that best describes it:

1)



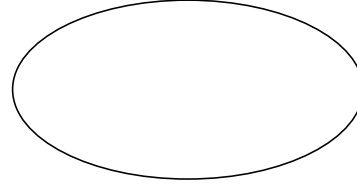
A. Hexagon

C. Rhombus

B. Septagon

D. Octagon

2)



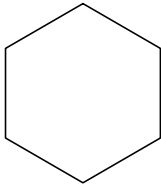
A. Ellipse

C. Septagon

B. Rhombus

D. Pentagon

3)



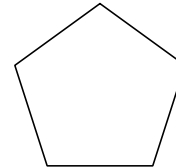
A. Hexagon

C. Septagon

B. Rhombus

D. Ellipse

4)



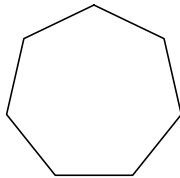
A. Ellipse

C. Octagon

B. Hexagon

D. Pentagon

5)



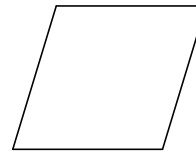
A. Septagon

C. Pentagon

B. Hexagon

D. Ellipse

6)



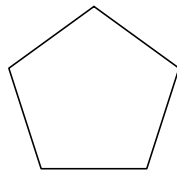
A. Pentagon

C. Octagon

B. Rhombus

D. Ellipse

7)



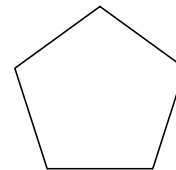
A. Rhombus

C. Septagon

B. Pentagon

D. Octagon

8)



A. Ellipse

C. Rhombus

B. Hexagon

D. Pentagon