

Geometry

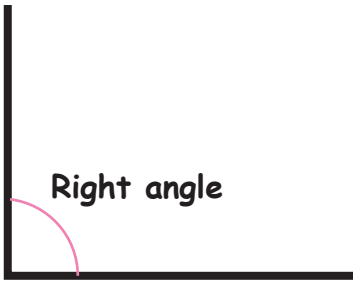
Name : Class :

Score :

Which characteristics match these angles ?

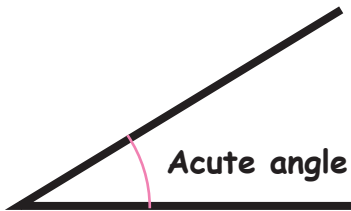
Characteristics

1)



360°

2)



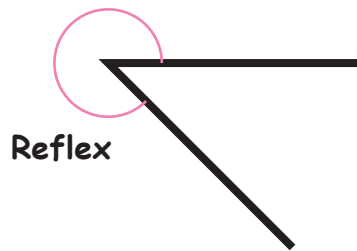
90°

3)



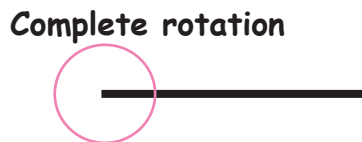
$> 180^{\circ}$

4)



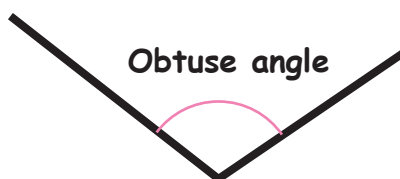
$> 90^{\circ} < 180^{\circ}$

5)



180°

6)



$< 90^{\circ}$

