

# Comparisons

Name : ..... Class : .....





Score : .....

Objective : Be able to compare between two items; either being more or less.

Which of the two boxes has more or less fish? Write A or B in the answer column. Also count and write down the number of fish in A and B.

## Questions

Fish

		A =
		B =

## Answer

More

Less

Remarks

---

---

---

Total

--