

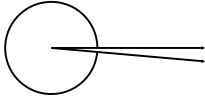
Name: _____

Class: _____

ANGLES

Classify and measure the angles.

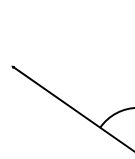
1.



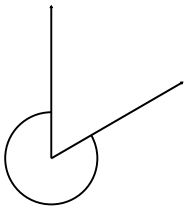
2.



3.



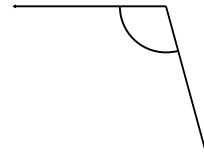
4.



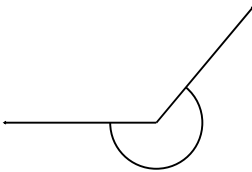
5.



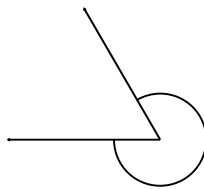
6.



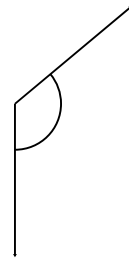
7.



8.



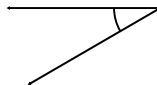
9.



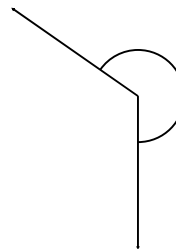
10.



11.



12.



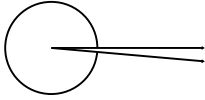
Name: _____

Class: _____

ANGLES

Classify and measure the angles.

1.



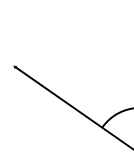
355° Reflex

2.



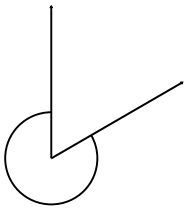
120° Obtuse

3.



55° Acute

4.



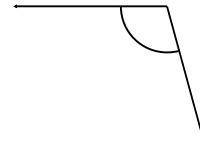
300° Reflex

5.



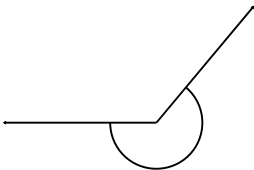
160° Obtuse

6.



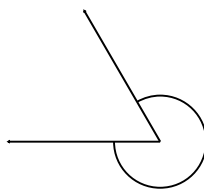
105° Obtuse

7.



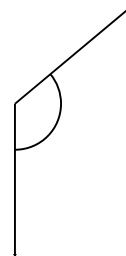
230° Reflex

8.



300° Reflex

9.



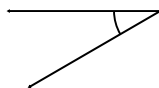
130° Obtuse

10.



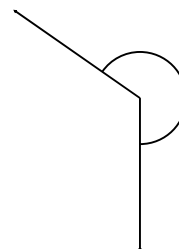
175° Obtuse

11.



30° Acute

12.



235° Reflex