

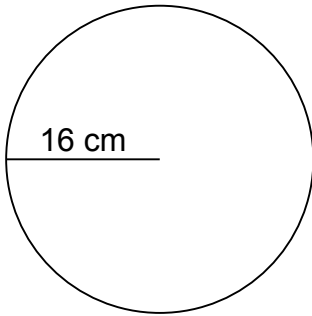
Name: \_\_\_\_\_

Class: \_\_\_\_\_

### CIRCUMFERENCE AND AREA

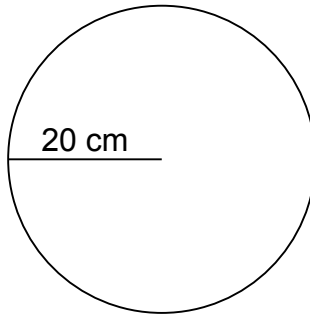
Calculate the circumference and area of each circle.

1.



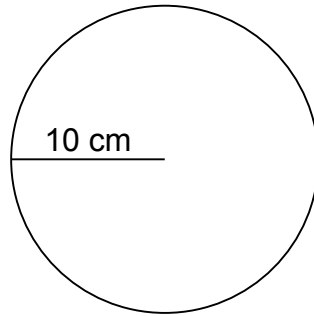
\_\_\_\_\_  
\_\_\_\_\_

2.



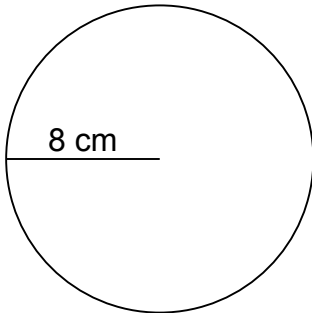
\_\_\_\_\_  
\_\_\_\_\_

3.



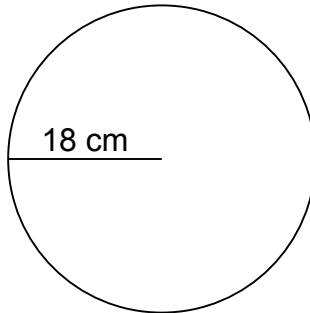
\_\_\_\_\_  
\_\_\_\_\_

4.



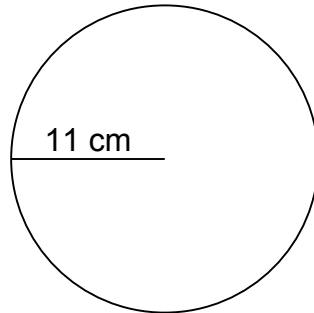
\_\_\_\_\_  
\_\_\_\_\_

5.



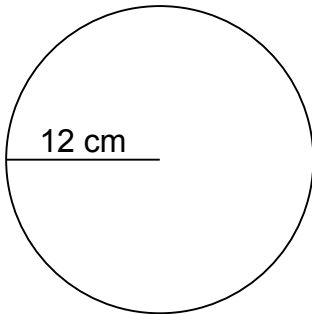
\_\_\_\_\_  
\_\_\_\_\_

6.



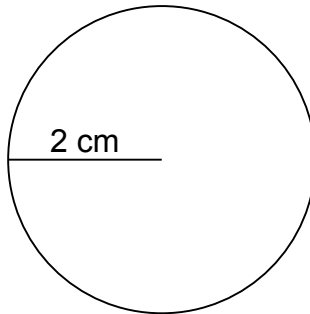
\_\_\_\_\_  
\_\_\_\_\_

7.



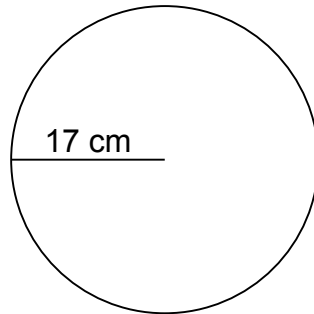
\_\_\_\_\_  
\_\_\_\_\_

8.



\_\_\_\_\_  
\_\_\_\_\_

9.



\_\_\_\_\_  
\_\_\_\_\_

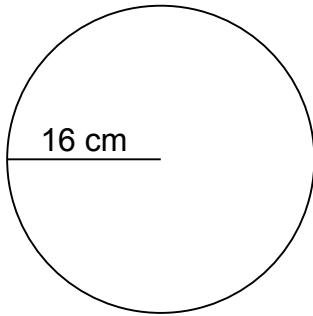
Name: \_\_\_\_\_

Class: \_\_\_\_\_

### CIRCUMFERENCE AND AREA

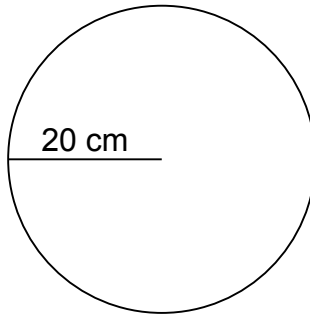
Calculate the circumference and area of each circle.

1.



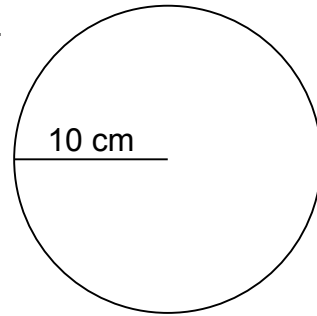
$$\begin{aligned} C &= 100.48 \text{ cm} \\ A &= 803.84 \text{ cm}^2 \end{aligned}$$

2.



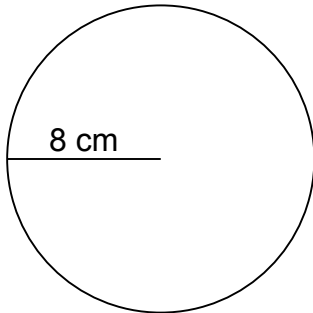
$$\begin{aligned} C &= 125.60 \text{ cm} \\ A &= 1,256.00 \text{ cm}^2 \end{aligned}$$

3.



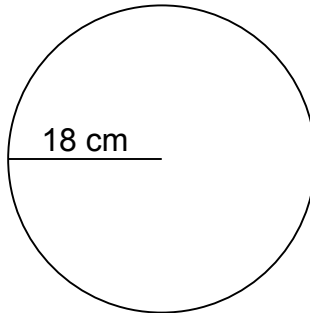
$$\begin{aligned} C &= 62.80 \text{ cm} \\ A &= 314.00 \text{ cm}^2 \end{aligned}$$

4.



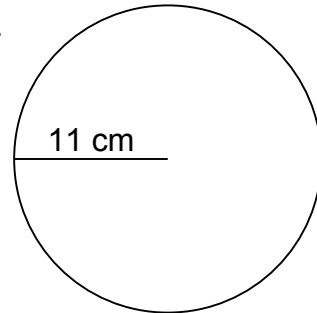
$$\begin{aligned} C &= 50.24 \text{ cm} \\ A &= 200.96 \text{ cm}^2 \end{aligned}$$

5.



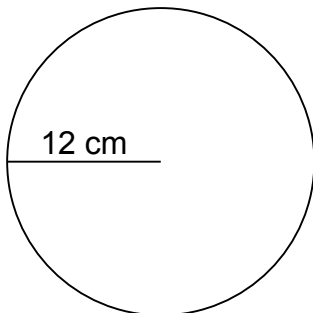
$$\begin{aligned} C &= 113.04 \text{ cm} \\ A &= 1,017.36 \text{ cm}^2 \end{aligned}$$

6.



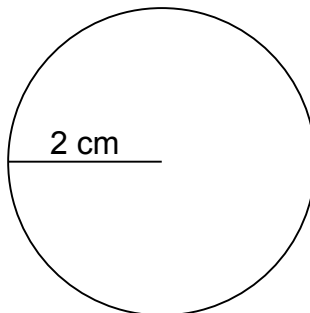
$$\begin{aligned} C &= 69.08 \text{ cm} \\ A &= 379.94 \text{ cm}^2 \end{aligned}$$

7.



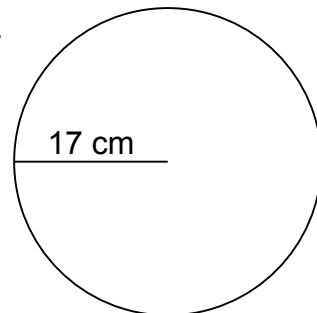
$$\begin{aligned} C &= 75.36 \text{ cm} \\ A &= 452.16 \text{ cm}^2 \end{aligned}$$

8.



$$\begin{aligned} C &= 12.56 \text{ cm} \\ A &= 12.56 \text{ cm}^2 \end{aligned}$$

9.



$$\begin{aligned} C &= 106.76 \text{ cm} \\ A &= 907.46 \text{ cm}^2 \end{aligned}$$