

Subtraction


Name : Class :



$$\begin{array}{r} 6 \\ - 3 \\ \hline \hline \end{array}$$



$$\begin{array}{r} 3 \\ - 2 \\ \hline \hline \end{array}$$




$$\begin{array}{r} 5 \\ - 4 \\ \hline \hline \end{array}$$

Subtraction

Name : Class :


Score :

Answers




1. Stars

$$\begin{array}{r} 6 \\ - 3 \\ \hline 3 \end{array}$$



2. Candies

$$\begin{array}{r} 3 \\ - 2 \\ \hline 1 \end{array}$$



3. Policemen

$$\begin{array}{r} 5 \\ - 4 \\ \hline 1 \end{array}$$