

Name: _____

Class: _____

Money

Add the coins.

1.  = _____

2.  = _____

3.  = _____

4.  = _____

5.  = _____


6.  = _____

Name: _____

Class: _____


Money


Add the coins.

1.  = \$0.32

2.  = \$0.36

3.  = \$0.62

4.  = \$0.61

5.  = \$0.85

6.  = \$1.25