



Addition



Find the sum of the objects shown in the pictures.



$$3 + 2 = \underline{\hspace{2cm}}$$




$$1 + 1 = \underline{\hspace{2cm}}$$




$$2 + 2 = \underline{\hspace{2cm}}$$



$$1 + 2 = \underline{\hspace{2cm}}$$



$$1 + 0 = \underline{\hspace{2cm}}$$



$$3 + 1 = \underline{\hspace{2cm}}$$

