


Counting from four to six



## COUNTING FROM 7 TO 10


Count the number of items below and circle the correct answer.

How many bananas are in the picture ?




7   8   9

How many tomatoes are in the picture ?



1   0   8   9

How many balls are in the picture ?



7   9   8