

Name: _____

Teacher: _____

Grade & Section: _____

Date: _____

Multiplication

Find the product of the numbers below. Write your answer in the space below each problem.



$$12 \times 1$$

$$12 \times 1 = \underline{\quad}$$

$$12 \times 2$$

$$12 \times 2 = \underline{\quad}$$

$$12 \times 3$$

$$12 \times 3 = \underline{\quad}$$

$$12 \times 4$$

$$12 \times 4 = \underline{\quad}$$

$$12 \times 5$$

$$12 \times 5 = \underline{\quad}$$

$$12 \times 6$$

$$12 \times 6 = \underline{\quad}$$



Name: _____


Date: _____

Matching Multiplication


Draw a line to match the problems to their answers below.




$12 \times 1 =$



$12 \times 2 =$



$12 \times 3 =$



$12 \times 4 =$



$12 \times 5 =$



36



24



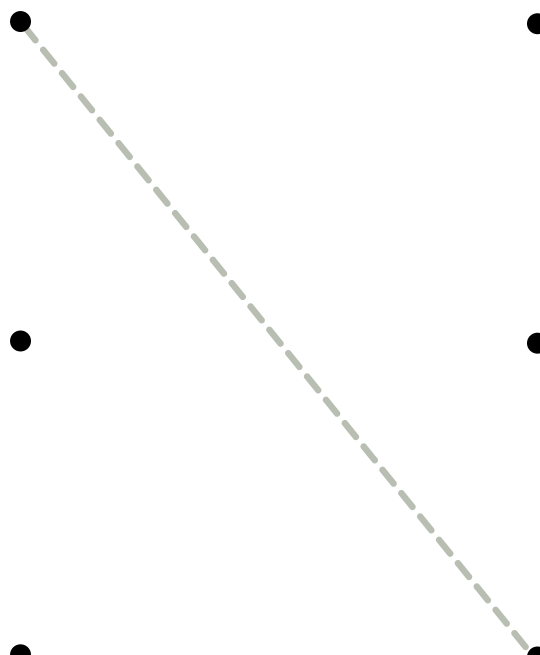
12



60



48




Name: _____

Date: _____

Matching Multiplication


Draw a line to match the problems to their answers below.



$12 \times 1 =$




$20 + 4$



$12 \times 2 =$




$6 + 30$



$12 \times 3 =$




$6 + 6$




$12 \times 4 =$



$50 + 10$



$12 \times 5 =$



$44 + 4$


Name _____

Teacher _____

Class _____

Date _____

Time to do Multiplication !



$$\begin{array}{r} 12 \\ \times 1 \\ \hline \end{array}$$

$$\begin{array}{r} 12 \\ \times 3 \\ \hline \end{array}$$

$$\begin{array}{r} 12 \\ \times 3 \\ \hline \end{array}$$

$$\begin{array}{r} 12 \\ \times 2 \\ \hline \end{array}$$

$$\begin{array}{r} 12 \\ \times 5 \\ \hline \end{array}$$

$$\begin{array}{r} 12 \\ \times 6 \\ \hline \end{array}$$

$$\begin{array}{r} 12 \\ \times 7 \\ \hline \end{array}$$

$$\begin{array}{r} 12 \\ \times 8 \\ \hline \end{array}$$

$$\begin{array}{r} 12 \\ \times 9 \\ \hline \end{array}$$

$$\begin{array}{r} 12 \\ \times 10 \\ \hline \end{array}$$

$$\begin{array}{r} 12 \\ \times 11 \\ \hline \end{array}$$

$$\begin{array}{r} 12 \\ \times 12 \\ \hline \end{array}$$


$$\begin{array}{r} 12 \\ \times 13 \\ \hline \end{array}$$

$$\begin{array}{r} 12 \\ \times 14 \\ \hline \end{array}$$

$$\begin{array}{r} 12 \\ \times 15 \\ \hline \end{array}$$

$$\begin{array}{r} 12 \\ \times 16 \\ \hline \end{array}$$

Multiplication with fun



Student's Name _____

Year & Section _____

LET'S MAKE MULTIPLICATION FUN!

Solve the equations and write the correct answers in the bubbles.

$12 \times 1 =$

$12 \times 2 =$

$12 \times 3 =$

$12 \times 4 =$

$12 \times 5 =$

$12 \times 6 =$

$12 \times 7 =$

$12 \times 8 =$


$12 \times 9 =$

$12 \times 10 =$

$12 \times 11 =$

$12 \times 12 =$

Multiplication



Find the product of the numbers below

Name:

Date:

Section:

Score:

Solve the problems listed below and fill in the correct answer in the spaces provided.

1.



2.




3.



MULTIPLICATION

HAVE FUN LEARNING HOW TO MULTIPLY



Name

Section

Date

Score

Instructions: Solve the equation and fill in the answer.

1.) $12 \times 3 = \underline{\quad}$

4.) $12 \times 2 = \underline{\quad}$

2.) $12 \times 4 = \underline{\quad}$

5.) $12 \times 6 = \underline{\quad}$

3.) $12 \times 7 = \underline{\quad}$

6.) $12 \times 9 = \underline{\quad}$


NAME

DATE

CLASS

SCORE

Multiplication



LET'S MULTIPLY

Solve the multiplication equations and write the correct answers in the circles.

12×3

12×2

12×5

12×7

12×8

12×1

12×1

12×1

12×3

12×11

12×7

12×10

