

Name: _____

Teacher: _____













Grade & Section: _____

Date: _____



MULTIPLICATION

Find the product of the numbers below. Write your answer in the space below each problem.

 \times 
 $3 \times 1 = \underline{\quad}$  \times 
 $3 \times 2 = \underline{\quad}$  \times 
 $3 \times 3 = \underline{\quad}$  \times 
 $3 \times 4 = \underline{\quad}$  \times 
 $3 \times 5 = \underline{\quad}$  \times 
 $3 \times 6 = \underline{\quad}$ 


3

Name: _____


Date: _____

Matching Multiplication


Draw a line to match the problems to their answers below.




$3 \times 1 =$




$3 \times 2 =$



$3 \times 3 =$



$3 \times 4 =$




$3 \times 5 =$



9



6



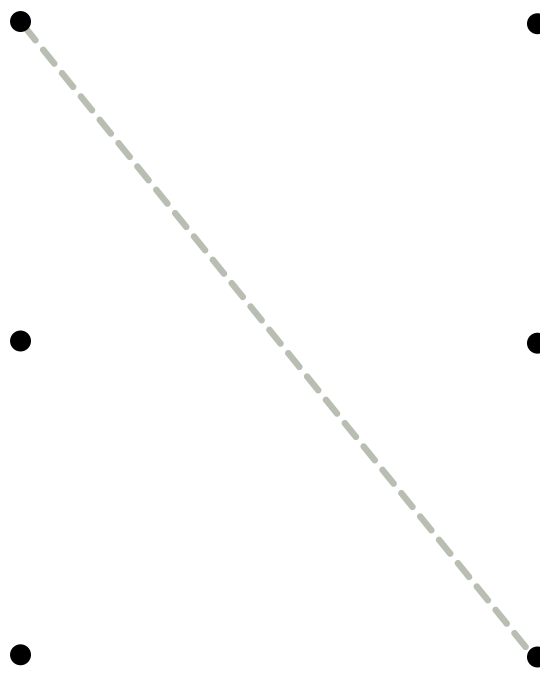
3



15



12





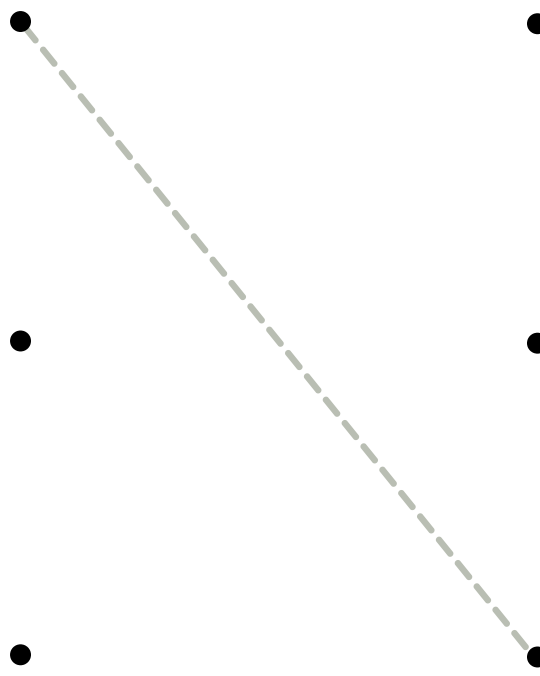





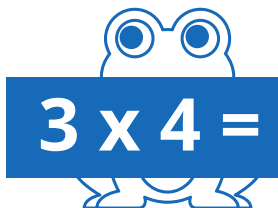



Name: _____

Date: _____



Matching Multiplication

Draw a line to match the problems to their answers below.






Name _____

Teacher _____

Class _____

Date _____

Time to do Multiplication !



$$\begin{array}{r} 3 \\ \times 1 \\ \hline \end{array}$$

$$\begin{array}{r} 1 \\ \times 3 \\ \hline \end{array}$$

$$\begin{array}{r} 3 \\ \times 3 \\ \hline \end{array}$$

$$\begin{array}{r} 3 \\ \times 2 \\ \hline \end{array}$$

$$\begin{array}{r} 3 \\ \times 5 \\ \hline \end{array}$$

$$\begin{array}{r} 3 \\ \times 6 \\ \hline \end{array}$$

$$\begin{array}{r} 3 \\ \times 7 \\ \hline \end{array}$$

$$\begin{array}{r} 3 \\ \times 8 \\ \hline \end{array}$$

$$\begin{array}{r} 3 \\ \times 9 \\ \hline \end{array}$$

$$\begin{array}{r} 3 \\ \times 10 \\ \hline \end{array}$$

$$\begin{array}{r} 3 \\ \times 11 \\ \hline \end{array}$$

$$\begin{array}{r} 3 \\ \times 12 \\ \hline \end{array}$$

$$\begin{array}{r} 3 \\ \times 13 \\ \hline \end{array}$$


$$\begin{array}{r} 3 \\ \times 14 \\ \hline \end{array}$$

$$\begin{array}{r} 3 \\ \times 15 \\ \hline \end{array}$$

$$\begin{array}{r} 3 \\ \times 16 \\ \hline \end{array}$$



Multiplication with fun




Student's Name _____

Year & Section _____


LET'S MAKE MULTIPLICATION FUN!

Solve the equations and write the correct answers in the bubbles.


$3 \times 1 =$




$3 \times 2 =$




$3 \times 3 =$




$3 \times 4 =$




$3 \times 5 =$




$3 \times 6 =$




$3 \times 7 =$




$3 \times 8 =$




$3 \times 9 =$




$3 \times 10 =$



$3 \times 11 =$




$3 \times 12 =$





Multiplication



Find the product of the numbers below

Name:

Date:

Section:

Score:

Solve the problems listed below and fill in the correct answer in the spaces provided.

1.



2.




3.





MULTIPLICATION

HAVE FUN LEARNING HOW TO MULTIPLY



Name

Section

Date

Score

Instructions: Solve the equation and fill in the answer.

1.) $3 \times 3 = \underline{\quad}$

4.) $3 \times 2 = \underline{\quad}$

2.) $3 \times 4 = \underline{\quad}$

5.) $3 \times 6 = \underline{\quad}$

3.) $3 \times 7 = \underline{\quad}$

6.) $3 \times 9 = \underline{\quad}$

NAME


DATE

CLASS

SCORE



Multiplication



LET'S MULTIPLY

Solve the multiplication equations and write the correct answers in the circles.

3×3

3×2

3×5

3×7

3×8

3×1

3×1

3×1

3×3

3×11

3×7

3×10

