


Name: _____

Date: _____

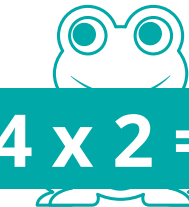
4

Matching Multiplication

Draw a line to match the problems to their answers below.




$4 \times 1 =$



$4 \times 2 =$



$4 \times 3 =$



$4 \times 4 =$



$4 \times 5 =$



12



8



4



20



16

